

Computer Operator Assistants

1. The player who received 'Golden Ball' (Best Player) award in the World Cup Foot ball Competition held in July 2018 is
 1. Griezmann - France
 2. Embasay - France
 3. Harry Kane - England
 4. Luka Modrich – Croatia

2. For the year 2017 Central Government and World Bank jointly announced ranks to the states on policies of Ease of Doing Business. The state which has secured First Rank is
 1. Telangana
 2. Andhra Pradesh
 3. Haryana
 4. Gujarat

3. As per the recent list announced by the World Bank basing on GDP, the position of India as the Biggest Economic System in the world is
 1. 4
 2. 5
 3. 6
 4. 3

4. The country where the Junior Football Players and their Coach were stuck in a cave, recently is
 1. Thailand
 2. Indonesia
 3. Malaysia
 4. Philippines

5. Basing on Census of 2011, recently the Census Commissioner has released data basing on which the position of Telugu speaking people in terms of majority people speaking their mother tongue
 1. 3
 2. 4
 3. 5
 4. 6

6. On 30th June 2018 the one who assumed charges as 4th DGP of Andhra Pradesh state is
 1. N.V. Surendra Babu
 2. Gowtham Novang
 3. R.P. Thakoor
 4. V.S.K. Kaumudi

7. Jacinda Ardern gave birth to a girl baby on 21st June 2018, who is the Prime Minister of this country
 1. New Zealand
 2. Finland
 3. Italy
 4. England
8. World Population Day is
 1. June 21
 2. July 21
 3. June 11
 4. July 11
9. In India the first Insect Museum has been started in this city recently
 1. Coimbatore
 2. Madhurai
 3. Chennai
 4. Tiruchirappalli
10. NITI Aayog 4th Administrative Council meeting was held on
 1. 2nd July, 2018
 2. 15th June, 2018
 3. 24th July, 2018
 4. 17th June, 2018

11. The maximum slab (in percentage) of GST in our country is

1. 23
2. 28
3. 18
4. 32

12. On the Day 'no confidence motion' raised in Lok Sabha ie on 20th July 2018, number of M.Ps possessed by Bharatiya Janata Party in Lok Sabha

1. 263
2. 283
3. 273
4. 253

13. The place where the construction of All India Institute of Medical Sciences was going on in our state is

1. Ongole
2. Mangalagiri
3. Guntur
4. Kakinada

14. Recently Section 377 of Indian Constitution came to hearing in Supreme Court. The section is related to
 1. Girls and Women
 2. Old age people and orphans
 3. Hijras and homosexuals
 4. Disabled

15. The Polavaram Project is declared as a National Project in the year
 1. 2017
 2. 2018
 3. 2016
 4. 2014

16. Recently Government of Andhra Pradesh has introduced Ryot Choriot (Raitu Radham) scheme, this is concerned with
 1. Distribution of Tractors
 2. Distribution of Bullock Carts
 3. Distribution of Harvesting Machines
 4. Distribution of Motors and Water Pumps

17. Recently for the year 2018, Financial Affairs Committee at the Centre has accepted and announced support price for paddy for normal variety as (in rupees per quintal)
 1. 1410
 2. 1470
 3. 1550
 4. 1750

18. In our country at present upto Rs.5 lakhs Income Tax exemption has been given to the senior citizens who have crossed this age of

1. 70 years
2. 75 years
3. 80 years
4. 85 years

19. This is one of the Districts in Andhra Pradesh identified as 'Aspirational District' by NITI Aayog recently

1. Srikakulam
2. Vijayanagaram
3. Ananthapuram
4. Kurnool

20. NCERT has initiated process of introducing QR Code in the text books recently. QR code means

1. Quick Response Code
2. Quality Reading Code
3. Quick Reading Code
4. Quite Readable Code

21. The sum of first five prime numbers is

1. 28
2. 11
3. 18
4. 26

22. $0.666 \times 1000 =$

1. 66.6
2. 666
3. 6.66
4. 6660

23. Identify the number divisible by 11

1. 637123
2. 631273
3. 316273
4. 746207

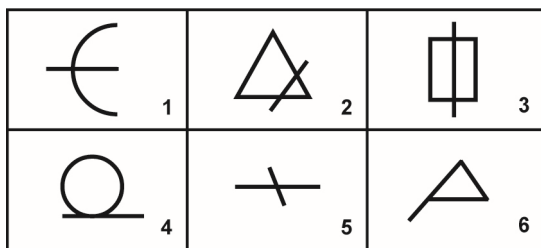
24. $-9657 + X - 3399 = 9999$; $X =$

1. 23055
2. 26552
3. 1999
4. 22345

25. $(112 \times 5^4) =$

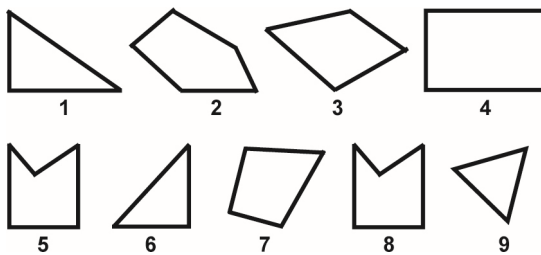
1. 67000
2. 76500
3. 77200
4. 70000

26. Group the figures into their classes using each figure only.



1. 1, 5; 4, 6; 2, 3
2. 1, 2; 3, 4; 5, 6
3. 1, 3; 2, 5; 3, 6
4. 4, 5; 5, 6; 2, 6





27. Group the figures into their classes using each figure only.




1. 7, 8, 9; 2, 4, 3; 1, 5, 6
2. 1, 3, 7; 4, 5, 7; 6, 8, 9
3. 1, 6, 8; 3, 4, 7; 2, 5, 9
4. 1, 6, 9; 3, 4, 7; 2, 5, 8

28. Look carefully the sequence of the symbols and find the correct pattern.




1. 
2. 
3. 
4. 

29. Identify the number that fits in the question mark.



1. 6
2. 5
3. 9
4. 7

30. Identify the missing number



1. 40
2. 30
3. 28
4. 46

31. Square root of $(8 - 2\sqrt{5})(8 + 2\sqrt{5})$

1. $\sqrt{11}$
2. $2\sqrt{11}$
3. 2
4. $\sqrt{40}$

32. Find the missing number in the series

| | | | | |
|---|----|----|----|----|
| ? | 19 | 23 | 29 | 31 |
|---|----|----|----|----|

1. 12
2. 15
3. 16
4. 17

33. Find the next letter in the series

B E H K ____

1. L
2. M
3. N
4. O

34. A sum of Rs.5000 is to be given in the form of 71 prizes. If the prize money is either Rs.100 or Rs.25. Then the number of prizes of Rs.100 are

1. 53
2. 41
3. 39
4. 43

35. The cost of an article goes down every year by 20% of its previous year. If the cost of it after two years is Rs.15,360 then its original cost is

1. Rs. 24,000
2. Rs. 20,000
3. Rs. 30,000
4. Rs.19,200

36. Simplify $6\frac{5}{6} \times 5\frac{1}{3} + 17\frac{2}{3} \times 4\frac{1}{2} = \dots\dots\dots$

1. $112\frac{1}{3}$

2. $116\frac{2}{3}$

3. $115\frac{17}{18}$

4. $116\frac{17}{18}$

37. The least number which when divided by 15, 27, 35, 42 leaves in each case a remainder 9 is

1. 1899

2. 1596

3. 1890

4. 1881

38. In a school of 300 students, every student reads 5 newspapers and every newspaper is read by 60 students. The number of newspapers is

1. at least 30

2. at most 20

3. exactly 25

4. none

39. $3 \text{ Median} - 2 \text{ Arithmetic Mean} = \dots\dots\dots$

1. Mode
2. Median
3. Arithmetic mean
4. Zero

40. The probability of drawing an Ace or a Spade from a well shuffled pack of 52 cards is $\dots\dots\dots$

1. $\frac{5}{13}$
2. $\frac{17}{52}$
3. $\frac{15}{52}$
4. $\frac{4}{13}$

Read the following passage and answer the question given below it:

Currently, a severe drought threatens several Indian States – Rajasthan, Gujarat and even Maharashtra, an advanced industrialized State. Indeed, as many as 19 districts in Maharashtra are badly affected and villagers have been forced to depend on water supplied through official water tankers. Reports suggest that because of the huge demand-supply gap, the village elderly are having to do with not more than one glass of drinking water throughout a day. This is apart from contaminated water, which routinely causes outbreaks of diarrhoeal diseases like cholera and dysentery, typhoid and malaria. More than 15 million children under five years die and more than 1.2 billion people's health is adversely affected every year on account of unsafe drinking water. Needless to say, women and children suffer the most.

41. Which of the following is not caused by unclean water?
1. Cholera
 2. Dysentery
 3. Malaria
 4. Shortage of food

Read the following passage and answer the question given below it:

Currently, a severe drought threatens several Indian States – Rajasthan, Gujarat and even Maharashtra, an advanced industrialized State. Indeed, as many as 19 districts in Maharashtra are badly affected and villagers have been forced to depend on water supplied through official water tankers. Reports suggest that because of the huge demand-supply gap, the village elderly are having to do with not more than one glass of drinking water throughout a day. This is apart from contaminated water, which routinely causes outbreaks of diarrhoeal diseases like cholera and dysentery, typhoid and malaria. More than 15 million children under five years die and more than 1.2 billion people's health is adversely affected every year on account of unsafe drinking water. Needless to say, women and children suffer the most.

42. The number of children who die on account of drinking unsafe water are.....
1. 1.2 billion
 2. More than 15 million
 3. 16 million
 4. No children

Choose the appropriate adjective for the question given below:

43. I have never seen work than this.

1. Neat
2. neater
3. neatest
4. neatier

Choose the appropriate adjective for the question given below:

44. The old man hasn't gothair on his head.

1. Many
2. much
3. more
4. most

Choose the correct noun form that fits in the blank.

45. I saw in the supermarket.

1. two females
2. two women
3. two woman
4. None

Choose the right subject verb combination for the following sentence.

46. Two-thirds of the land have been ploughed.

1. Two-third of the land has
2. Two-thirds of the land has
3. Two-third of the have
4. None

Choose the right subject verb combination for the following sentence.

47. Half of the hotels has been closed today.

1. Halves of the hotels have been closed today.
2. Half of the hotel have been closed today.
3. Half of the hotels have been closed today.
4. None

Identify the correct verb with respect to the context.

48. The population of Tokyo is greater than that of any other town in the world.

1. Greatest among any other
2. Greater than all other
3. Greater than those of any other
4. No correction required

Identify the correct verb with respect to the context.

49. She cooks, washes dishes, does her homework and then relaxing.
1. relaxing then
 2. then is relaxing
 3. relaxing is then
 4. then relaxes

Fill in the blank with the correct conjunction.

50. he was the best candidate, he didn't win the elections.
1. Although
 2. Besides
 3. moreover
 4. So

Fill in the blank with the correct conjunction.

51. Start earlyyou should miss the flight.
1. Lest
 2. Else
 3. Or
 4. None

Identify the suitable preposition to fill the blank.

52. The team comprises Dhoni, Virat and Sami.
1. Of
 2. On
 3. With
 4. No preposition required

Identify the suitable preposition to fill the blank

53. The student by hearted the poem word word.
1. By
 2. On
 3. For
 4. At

Identify the correct option with respect to the usage of tenses.

54. It every afternoon for the past week. The weather forecast predicts rain for next week too.
1. is raining
 2. was raining
 3. has been raining
 4. had been raining

Identify the correct option with respect to the usage of tenses.

55. When I went back to my hometown three years ago, I found that a lot of changes
1. are taken place
 2. were taken place
 3. have taken place
 4. had taken place

Identify the suitable expression to make the following sentence grammatically and meaningfully correct.

56. I spoke to Carol _____ the phone last night.
1. at
 2. through
 3. by
 4. on

The most appropriate Passive Voice option among the following.

57. He teaches us Grammar
1. Grammar is taught to us by him.
 2. We are being taught Grammar by him.
 3. Grammar is being taught us by him
 4. We are taught Grammar by him

Choose the right option which is in Reported Speech for the give sentence.

58. Rajeev said to Kavitha, "Sabitha will leave for her native place tomorrow."
1. Rajeev told Kavitha that Sabitha will leave for her native place tomorrow.
 2. Rajeev told Kavitha that Sabitha left for her native place the next day.
 3. Rajeev told Kavitha that Sabitha would be leaving for her native place the next day.
 4. Rajeev told Kavitha that Sabitha would leave for her native place the next day.

Identify the correct synonym (word that is similar in meaning)

59. Inebriate
1. Dreamy
 2. Stupefied
 3. Unsteady
 4. Drunken

Fill in the blank with suitable collocation (word combination)

60. The grapes are now enough to be picked.
1. Ready
 2. Mature
 3. Ripe
 4. Advanced

61. You visit your Bank to ask about your account balance. The teller gives you details within a short span of time. Which of the following programs does the bank use?
1. Presentation program
 2. Database program
 3. Graphics program
 4. Publishing program
62. You are at the tenth page of a 20-page document. You need to make changes on the last page of the document. Which key will you use in combination with Ctrl to move to the bottom of the last page?
1. Home
 2. Shift
 3. Esc
 4. End
63. HTTP stands for...
1. Hyper Text Transmission Patent
 2. Hyper Text Transfer Protocol
 3. High Text Transfer Protocol
 4. Hash Transfer Text Protocol

64. DVD means

1. Data Variable Disk
2. Digitization Video Disk
3. Direct Versatile Disk
4. Digital Versatile Disk

65. The formula used to divide A2, B2 values with C2 in MS-Excel is...

1. $A2 + B2 / C2$
2. $A2 \times B2 / C2$
3. $= (A2 + B2) / C2$
4. $C2 / A2 + B2$

66. This is not a picture format

1. .jpg
2. .tiff
3. .gif
4. .docx

67. In this MS-Word document, this is used to type text, editing and formatting.

1. Normal View
2. Web Layout View
3. Print Layout View
4. Out Line View

68. Solutions for Hardware or Software problems of computer is known as
1. Tutorials
 2. Troubleshooting
 3. Scanning
 4. Hacking
69. The information of web pages made of hyperlinks is called as
1. Website
 2. Networking
 3. Homepage
 4. Tapping
70. http in this web address 'http:// www.google.com' is
1. Protocol
 2. Username
 3. Domain Name
 4. Organisation Name
71. The following is used to adjust text in MS-Word document.
1. Left Alignment
 2. Right Alignment
 3. Center Alignment
 4. Justify

72. The shortcut key used to layer masking from Adobe Photoshop-7 windows operating system

1. Shift + Ctrl + V
2. Shift + Ctrl + C
3. Shift + Ctrl + S
4. Shift + F1

73. This is used to connect internet websites in a safety mode

1. Virtual Path
2. Virtual Private Network
3. Cloud Computing
4. Virtual Reality

74. You create a presentation by using PowerPoint 2013. You include examples in the presentation for your reference. You need to print the presentation to take it home. Which of the following options will you select in the Print dialog box to ensure that the examples are also printed?

1. Slides
2. Notes Pages
3. Outline View
4. Handouts

75. Your friend has got promotion. You wanted to send an e-mail message to congratulate him. You want to create a Windows Mail account to send this message. You can create a new Windows Mail account in this....
1. Charms
 2. www.bing.com
 3. PC Settings
 4. www.outlook.com
76. You wanted to know more about 'active volcanoes' in the world. You connect your computer to the Internet to find information based on the keyword \"active volcanoes.\" Which of the following features of the World Wide Web (WWW) will you use?
1. Search engine
 2. Plug-in
 3. Uniform Resource Locator (URL)
 4. E-mail
77. You want to send an e-mail message to your friends. You have a modem connected to your desktop computer. What else do you need to send the e-mail message?
1. Personal Digital Assistant (PDA)
 2. Internet connection
 3. Web cam
 4. Printer

78. Your sister Sweta, a class 9th student, wants to know what an e-mail is and what she will need to be able to exchange e-mail messages with her friends. What will you tell Sweta? Select two.

- A) Computer
- B) Internet access
- C) Printer
- D) Plug-in

- 1. A, B
- 2. B, C
- 3. A, C
- 4. B, D

79. When sending an email, this line describes the contents of the message.
1. To
 2. Subject
 3. Contents
 4. CC
80. You are checking a word document; the key you need to use to move to the beginning of the page is _____
1. Window key
 2. Shift key
 3. Tab key
 4. Home key
81. You wanted to present “Eruption of a volcano” lesson through a power point presentation. Accidentally, the pen drive got corrupted which has the presentation. What should he have done?
1. Back up the presentation in another CD / Pen drive / Hard disk.
 2. Make 2 copies of the presentation on the same pen drive.
 3. Save the presentation with a different name in e-mail.
 4. Create a new slide before the class starts

82. Digital camera is this type of device.

1. Input
2. Software
3. Output
4. Storage

83. To print a PowerPoint presentation, you need to press this key.

1. Ctrl + P
2. Ctrl + S
3. Ctrl + Shift + P
4. Ctrl + A

84. This component of the computer is also considered as its heart, this is

1. Monitor
2. Keyboard
3. Scanner
4. Microprocessor

85. The blinking symbol on the computer screen is called the ----

1. Mouse
2. Logo
3. Hand
4. Cursor

86. Data going into the computer is called -----
1. Output
 2. Input
 3. Algorithm
 4. Calculators
87. Sometimes, when the computer crashes, what should you do then?
1. Seek technical assistance from the IT person.
 2. Sit and wait for the problem to be solved by itself.
 3. Discuss with other teachers about the problem.
 4. Take the help of another teacher and resolve it.
88. Your brother asks where Berlin is in the world using ICT. To find the answer and explain it to the student, you would
1. Take the help of Google Maps and show them to the class
 2. Search the school lab for world map and search Berlin
 3. Say I don't know
 4. Draw the Berlin map on the board.

89. The command to open control panel is

1. Start → Control Panel
2. Right click → Properties → Control Panel
3. Programs → Documents → Right click → Control Panel
4. Start → Properties → Control Panel

90. With CD, you can

1. Read
2. Write
3. Read and Write
4. Delete

91. Ramesh, your friend was showing how to use the MS-Word in the Computer lab, when suddenly the computer froze or got locked up (become unresponsive). What should he do then?

1. Cancel the class and complain about the issue to the Headmaster.
2. Wait for some time, close the window using task manager, reboot the computer.
3. Remove the parts of the computer, check loose connections, plug it back and reboot.
4. Use his own laptop.

92. Meena, your colleague complained that the Lab computer does not turn on. What steps should the teacher do?

1. Check for Power cord connected to the computer, outlet, loose connections, Inverter, reboot.
2. Check for the Computer cable, model number, fuse, reboot.
3. Check for Computer's temperature, lights and reboot.
4. Check for surge protector, cable connections and shut down.

93. Special effects used to introduce slides in a presentation are known as

1. Transitions
2. Effects
3. Custom Animation
4. Annotations

94. Where are the saved files stored in Computer?

1. RAM
2. Hard disk
3. Cache
4. Any of the above

95. MS-Excel is used for creating
1. Presentations
 2. Documents
 3. Sending mails
 4. Spreadsheets
96. A picture has been taken with a digital camera and processed appropriately. The actual print of the picture is considered as.....
1. Data
 2. Output
 3. Input
 4. The process
97. After checking your e-mail, to exit you need to do,
1. compose
 2. send mail
 3. forwarding e-mail
 4. logout / sign out
98. The spread sheet file created in MS-Excel is...
1. Work Sheet
 2. Work Book
 3. Label
 4. Fill Handle

99. Copying the material on the website without the permission of the owner and not acknowledging the source is known as:

1. Permissism
2. Copyism
3. Plagiarism
4. Emulatism

100. Viewing different sites in internet with curiosity is known as

1. Surfing
2. Networking
3. Tagging
4. Hacking